

Bharat Talent Search Exam 2026

Std. : 2nd

Medium - English

Questions : 75

Time : 2 Hrs.

Subject : Language, Maths, EVS, Logical Thinking

Marks : 150

Section A

Instruction for Q.1 to Q. 3 - Read the poem and choose correct option for given question.

In the sky they soar,
With wings to explore,
Feathers bright and gay,
Birds fly in a ballet.

With a chirp and a tweet,
Their songs are so sweet,
From tree to tree they roam,
Making the world their home.

In nests they rest at night,
Under the moon's soft light,
Then at dawn they rise,
Painting the morning skies.

- Q.1 What do birds do in the sky?
1) Swim 2) Fly 3) Crawl 4) Jump
- Q.2 Where do birds rest at night?
1) Underwater 2) Underground 3) In nests 4) On rocks
- Q.3 What makes birds' songs sweet?
1) Loudness 2) Sweetness 3) Softness 4) Clarity
- Q.4 Dad planted tree in the garden.
1) a 2) an 3) the 4) some
- Q.5 What do we call a male pigeon?
1) Pigeon 2) Peacock 3) Cock 4) Drake
- Q.6 Choose the correct spelling.
1) Beter 2) Bettr 3) Bettar 4) Better
- Q.7 Monkeys swing from tree to tree with their...
1) Trunk 2) Mane 3) Long tail 4) Stripes

- Q.8 How to write the number 56 in words ?
 1) Fifty 2) Fifty Two 3) Sixty 4) Fifty Six
- Q.9 4 Ten +unit = 45
 1) Four 2) Three 3) Five 4) Six
- Q.10 Fourty means =
 1) 3×10 2) 5×8 3) 8×4 4) 5×6
- Q.11 In 64 number which is the new number formed by increasing the number of decimal place by one and decreasing the number of units place by two ?
 1) 65 2) 70 3) 72 4) 64
- Q.12 If Arnav's cow gives 8 litres of milk per day, how many litres of milk will the cow give in a week?
 1) 64 metres 2) 56 litres 3) 65 litres 4) 48 litres
- Q.13 Which statement is correct in the number 82 ?
 1) The place value of 8 is 8. 2) The place value of 2 is 20.
 3) The place value of 8 is 80. 4) 2 is in the tens place.
- Q.14 Which is the fastest flying bird?
 1) Eagle 2) Sparrow 3) Swift 4) Pigeon
- Q.15 What kind of clothes do you wear while going to school?
 1) T-shirt 2) Baniyan 3) Jeans 4) Uniform
- Q.16 We hear the sound of rain with the help of which organ?
 1) Mouth 2) Nose 3) Hands 4) Ears
- Q.17 What type of waste is produced from vegetables, fruit peels, leftover food or tree leaves.
 1) Wet waste 2) Dry waste
 3) Organic waste 4) option 1 and 3 correct
- Q.18 Which letters will be written in the blank to form meaningful words.
- | | | |
|------|---|---|
| | a | r |
| | a | t |
| | o | w |
- 1) B 2) M
 3) J 4) C
- Q.19 Instructions: Identify the object that does not fit in the group.
 1) Hammer 2) Spoon 3) Sawing 4) Spade

Section B

Q.20 What is the singular form of 'teeth'?

- 1) teeths 2) teeth 3) teath 4) tooth

Q.21 What is the plural of 'leaf'?

- 1) leavs 2) leafs 3) leaves 4) leafves

Q.22 Which word sounds like 'Creek'?

- 1) crack 2) crook 3) creak 4) kick

Q.23 Select suitable word for the given word.

Honeybee -

- 1) Honey 2) Hardwork 3) Insect 4) Flower

Q.24 Which is the singular form of 'people'?

- 1) peeps 2) people 3) persons 4) person

Q.25 Choose the correct sentence.

- 1) i like apples. 2) I like apples. 3) I like Apples 4) i Like apples.

Q.26 What is the opposite of night?

- 1) Day 2)Midnight 3) Morning 4) Evening

Q.27 Guess the number that should be between the given numbers.

23		25
----	--	----


- 1) 24 2) 27
3) 22 4) 20

Q.28 Count and write the number of circles.



- 1) 3 2) 4
3) 1 4) 5

Q.29 Which number coach is before elephant's coach?



- 1) fourth 2) Fifth 3) Third 4) second

Q.30 What is the position number of the Giraff's coach from the end ?

- 1) Third 2) fourth 3) Fifth 4) Second

- Q.31 Which property is common between a square and a rectangle ?
 1) four equal side 2) four angles 3) No angles 4) Three sides
- Q.32 Sunanda has 19 Rose flowers, 15 Lotus flowers and 10 Jasmine flowers. If the number of flowers are arranged in descending order, what will be the flowers in the middle?
 1) Rose 2) Lotus 3) Mogra 4) Jasmine
- Q.33 Which of the following figures has only three sides?
 1) Rectangle 2) Square 3) Circle 4) Triangle
- Q.34 Identify the taste -
 Tamarind –
 1) Sweet 2) Bitter 3) Salty 4) Sour
- Q.35 Identify the correct statement.
 1) Pumpkin, Watermelon grow on small plants.
 2) Pumpkin, Watermelon grow on small bushes.
 3) Pumpkin, Watermelon grow on small creeper (vine)
 4) Pumpkin, Watermelon grow on small tubers.
- Q.36 What should be used instead of plastic bags ?
 1) Paper bag 2) Nylon bag 3) Cloth bag 4) option 1 and 3 is correct
- Q.37 Honey : bee : catechu?
 1) red 2) flame of the forest 3) Bitter 4) Acacia catechu
- Q.38 In a code language, 4 is called 5, 5 is called 6, and 6 is called 7. Then what is $4 + 6 - 5 = ?$
 1) 5 2) 6 3) 7 4) 8

Section C

Instruction for Q.39 and Q. 40 - Read the question and choose the correct option.



- Q.39 What place shown in the picture?
 1) School 2) Market 3) Temple 4) Bus stand

Q.40 Which bus station is shown in the picture?

1) Cloudy bus

2) Rainy bus

3) Shapur bus station

4) Shahapur Bus Station

Q.41 Choose the adjective in this sentence: 'The flower is pink.'

1) Flower

2) is

3) The

4) Pink

Q.42 Which is not a noun?

1) Swim

2) River

3) Bat

4) Ball

Q.43 Which is not a noun?

1) Happy

2) Temple

3) School

4) Apple

Q.44 Choose the correct sentence.

1) The dogs is barking loudly.

2) The dog are barking loudly.

3) The dogs are barking loudly.

4) The dog barking loudly

Q.45 Choose the adjective in this sentence:

'The grapes are sour.'


1) Grapes

2) Are

3) Sour

4) The

Instruction for Q.46 d Q. 47 - Observe the picture above and choose the correct option for the answer to the following questions.



Q.46 Where is the farmer from the fence?

1) Back

2) Next

3) Inside

4) Outside

Q.47 Choose the wrong option from the following options.

1) The dog is under the tree.

2) The crow is on the tree.

3) The cock is inside the house.

4) The farmer is inside the fence.

- Q.57 What is Sumit's relationship with son of his mother and mother's brother ?
1) Himself 2) Himself or brother 3) cannot say 4) option 1 and 2 is correct

Section D


- Q.58 Find the hidden word.

Raincoat :

- 1) Con 2) Ainc 3) Rain 4) Rainc

- Q.59 Choose the correct pronoun.

..... are cousins.



- 1) They 2) He
3) It 4) She

- Q.60 Select the action word from the following.

- 1) School 2) Swim 3) Ground 4) City

- Q.61 Select the suitable action word.

I can..... a bicycle.

- 1) Drive 2) Draw 3) Drink 4) Ride

- Q.62 Fill in the blanks with suitable pronouns.

----- is a girl.

- 1) He 2) She 3) It 4) They

- Q.63 Which is First day of Week?

- 1) Friday 2) Sunday 3) Monday 4) Wednesday

- Q.64 Which hand of the clock moves the fastest ?

- 1) Hour hand 2) Minute hand 3) Second hand 4) Day hand

- Q.65 In which month is Christmas ?

- 1) November 2) September 3) October 4) December

- Q. 66 January, March, May, July, September.....

- 1) October 2) March 3) November 4) July

- Q.67 25, 16, 4, 1

- 1) 8 2) 9 3) 10 4) 12

- Q.68 Sagar gave the shopkeeper 200 Rs. and bought 2 kg of Sugar at 48 Rs. 1 Kg of Jaggery at 32 Rs. and 1 kg of groundnuts at 23 Rs. then how many Rs. the shopkeeper will return to Sagar.

- 1) 86 2) 68 3) 80 + 6 4) option 1 and 3 is correct

- Q.69 While playing cricket, Virat scored 76 runs while Shubham scored 57 runs, then how many more runs made by Virat than Shubham?
1) 26 2) 16 3) 19 4) 18
- Q.70 Which animal lives on tree?
1) Fish 2) Horse 3) Monkey 4) Rabbit
- Q.71 Which is the capital of Maharashtra?
1) Delhi 2) Mumbai 3) Kolkata 4) Chennai
- Q.72 'The Sun is burning outside' this statement indicates.....
1) Summer 2) Hivsala 3) Winter 4) rainy
- Q.73 Identify the odd group.
1) January, February, March 2) October, November, December
3) May, June, July 4) September, November, December
- Q.74 If Suresh bows to the rising sun and turns left twice at right angles, what will be the direction in front of him?
1) North 2) South 3) West 4) East
- Q.75 Can a person who enters a tiger's den come out alive ?
1) The tiger will eat him.
2) The tiger will make him a friend.
3) Certainly! But the tiger should not be in the den
4) Certainly! But the tiger will break out of fear.

SPACE FOR ROUGH WORK